




Name

Date

# 12 TIMES TABLE - SALAMANDER SHEET 1

Write in the answers to each fact in Sally Salamander's ball.



Newton the Number Newt says "Shade the odd answers in green and the even answers in blue. What do you notice?"

Name

Date

# 12 TIMES TABLE - SALAMANDER SHEET 1 ANSWERS

Write in the answers to each fact in Sally Salamander's ball.

The image shows nine salamanders arranged in a 3x3 grid. Each salamander has a multiplication fact written on its body and an answer in a blue circle. The facts and answers are:

$12 \times 3 =$	$12 \times 4 =$	$12 \times 2 =$
36	48	24
$12 \times 5 =$	$12 \times 10 =$	$12 \times 7 =$
60	120	84
$12 \times 12 =$	$12 \times 11 =$	$12 \times 8 =$
144	132	96

Newton the Number Newt says "Shade the odd answers in green and the even answers in blue. What do you notice?"

There are no odd answers!