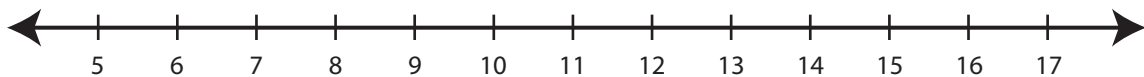


Showing Pattern

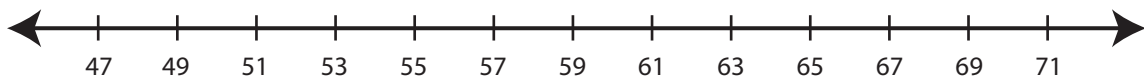
ES1

Read the rule. Draw hops to show the rule in each number line.

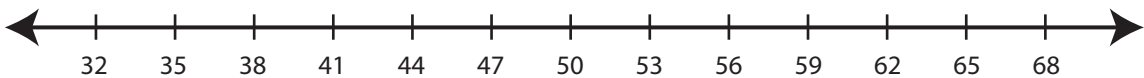
- 1) Start at 6. Add 2 each time.



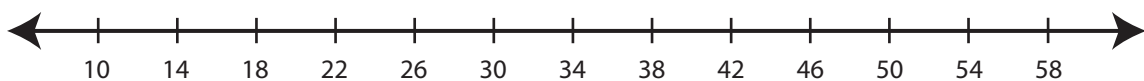
- 2) Start at 71. Subtract 4 each time.



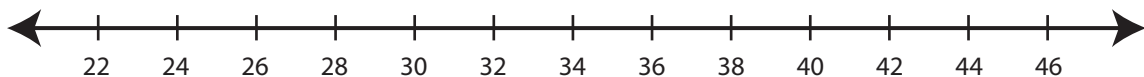
- 3) Start at 68. Subtract 9 each time.



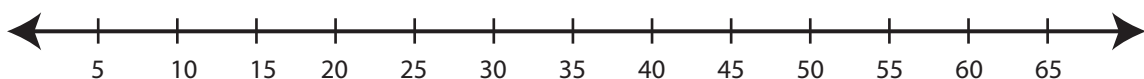
- 4) Start at 18. Add 8 each time.



- 5) Start at 24. Add 6 each time.



- 6) Start at 60. Subtract 10 each time.

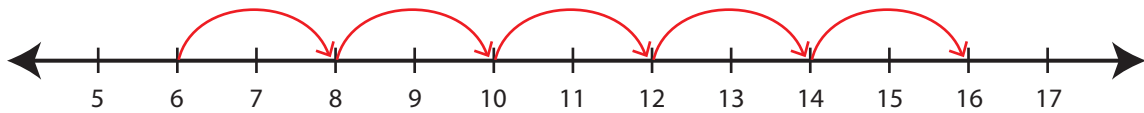


Answer Key**Showing Pattern**

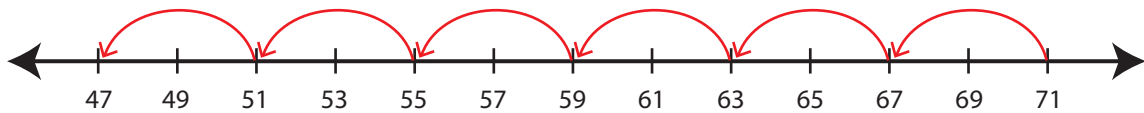
ES1

Read the rule. Draw hops to show the rule in each number line.

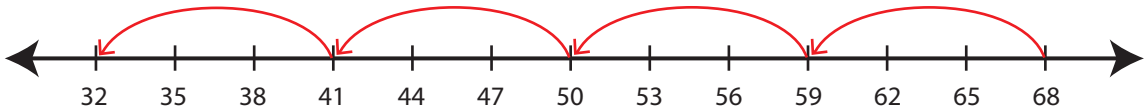
- 1) Start at 6. Add 2 each time.



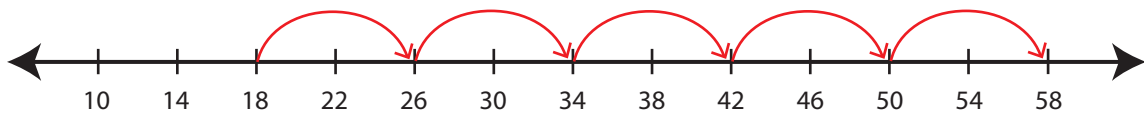
- 2) Start at 71. Subtract 4 each time.



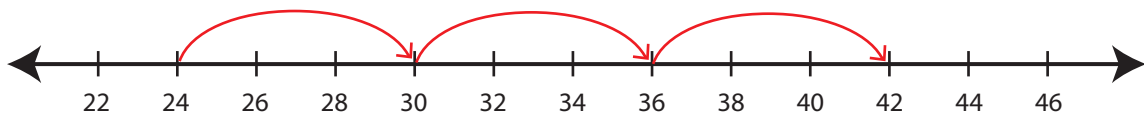
- 3) Start at 68. Subtract 9 each time.



- 4) Start at 18. Add 8 each time.



- 5) Start at 24. Add 6 each time.



- 6) Start at 60. Subtract 10 each time.

