

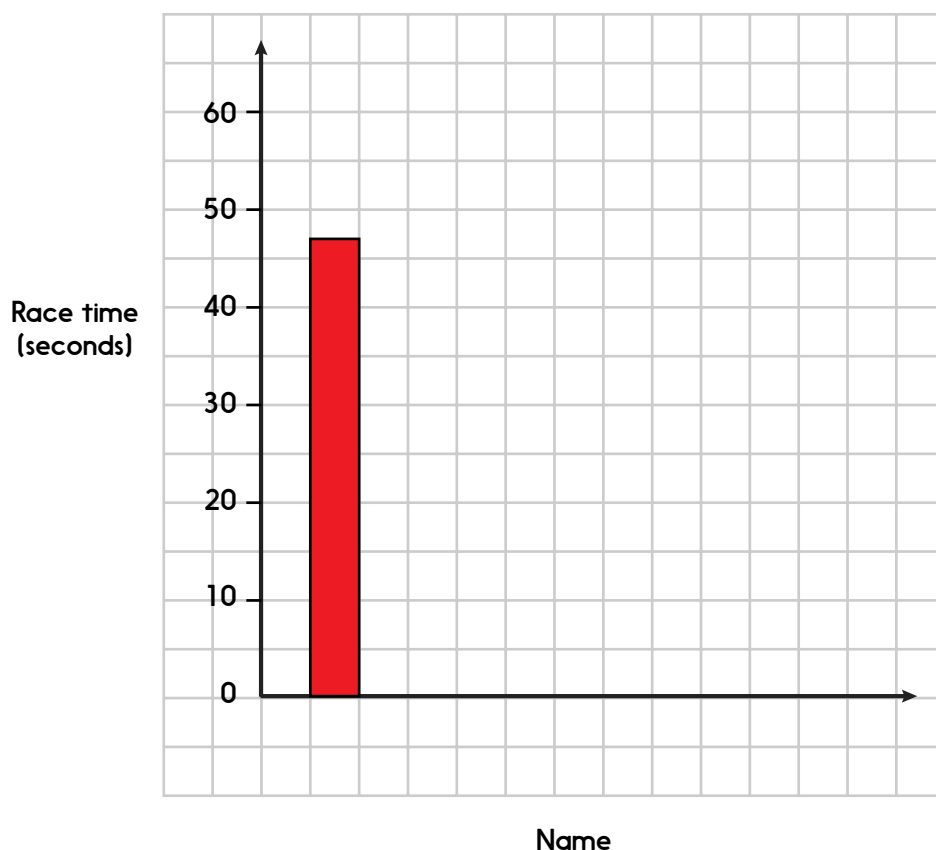
Practice Sheet Mild

Data practice

The table shows how quickly six people ran the 200m race. Use the information in the table to complete the bar chart.

Name	Race time (seconds)
Jessica	47
Imran	31
Holly	36
Karolina	28
Zain	29
Mason	54

Time taken to run 200 m



Challenge

Write two facts that you can interpret from the bar chart.

Fact 1: _____

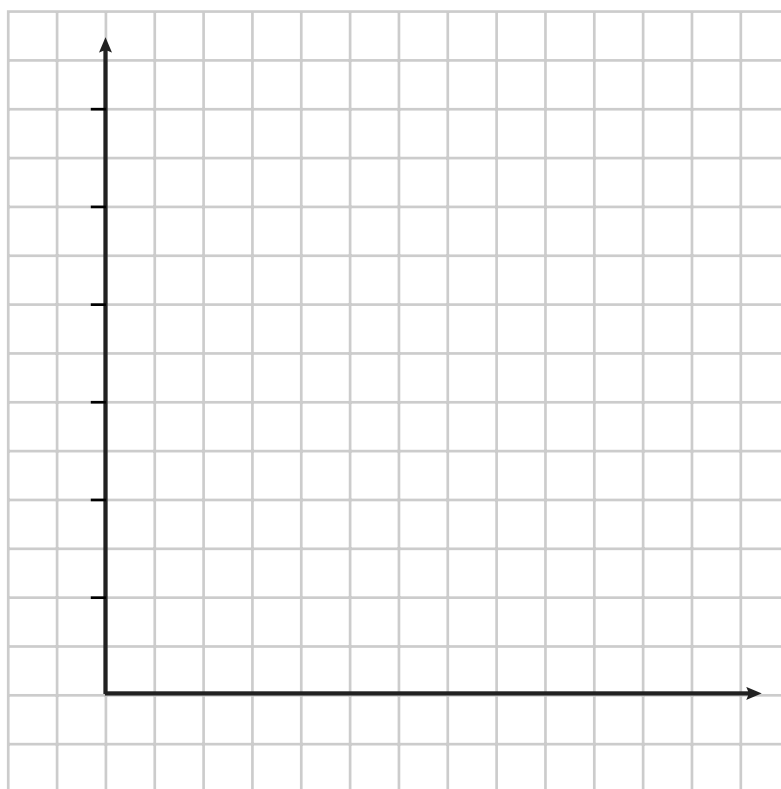
Fact 2: _____

Practice Sheet Hot

Data practice

The table shows how quickly six people ran the 200 m race. Use the information in the table to complete the bar chart.

Name	Race time (seconds)
Dan	53
Kirby	36
Zoe	31
Sophie	42
Omar	45
Jakub	39



Challenge

Write two facts that you can interpret from the bar chart.

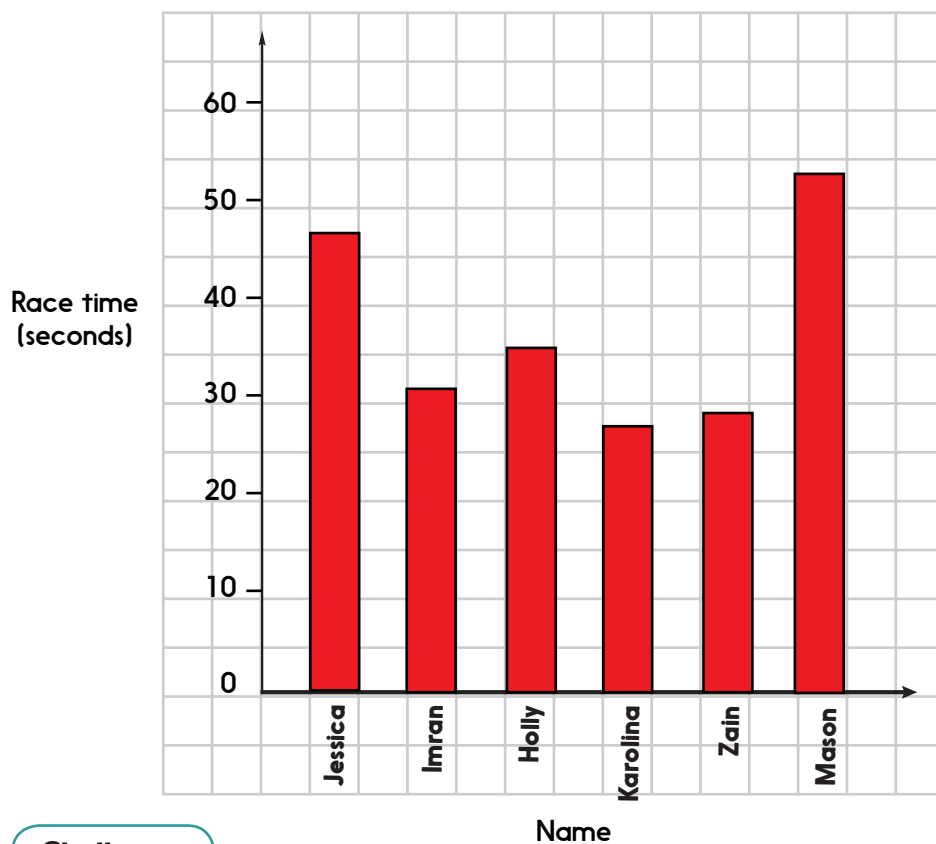
Fact 1: _____

Fact 2: _____

Practice Sheet Answers

Data Practice Mild

Time taken to run 200 m



Challenge

Children could give two of the following facts interpreted from the bar chart:

Mason was the slowest.

Karolina was the fastest.

Mason was last in the race.

Zain was second in the race.

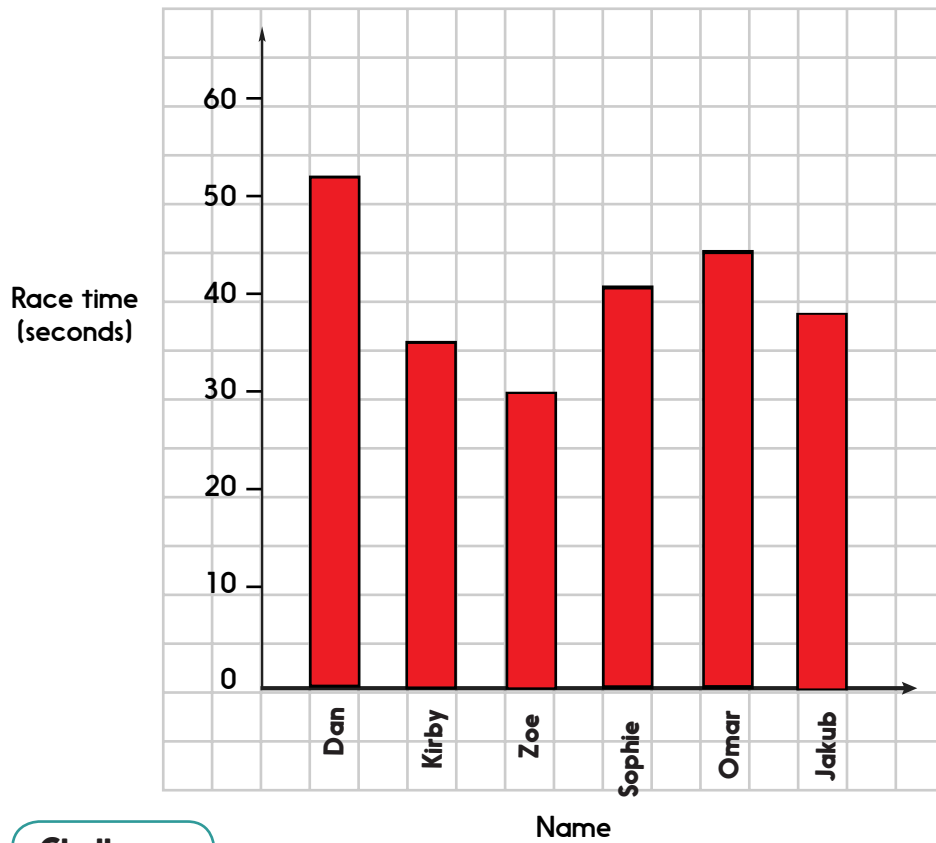
Imran was third in the race.

Karolina was one second faster than Zain... or other facts of their own.

Practice Sheet Answers

Data Practice Hot

Time taken to run 200 m



Challenge

Children could give two of the following facts interpreted from the bar chart:

Dan was the slowest.

Zoe was the fastest.

Dan was last in the race.

Kirby was second in the race.

Jakub was third in the race.

Zoe was two seconds faster than Jakub... or other facts of their own.