




Line Segment - Ruler


Measure the length of each line segment.

1)  cm

2)  cm

3)  cm

4)  cm

5)  cm

Draw a line segment for each measure.

6) 4 cm

7) 9 cm

8) 6 cm


9) 13 cm


10) 7 cm


Note : Answers may vary depending on the printer settings.

Answer Key


Measure the length of each line segment.

1)  8 cm

2)  10 cm

3)  14 cm

4)  5 cm

5)  12 cm

Draw a line segment for each measure.

6) 4 cm 

7) 9 cm 

8) 6 cm 

9) 13 cm 

10) 7 cm 