






Line Segment - Ruler

Measure the length of each line segment.

1)  cm2)  cm3)  cm4)  cm5)  cm

Draw a line segment for each measure.

6) 8 cm

7) 2 cm

8) 5 cm


9) 10 cm

10) 12 cm


Note : Answers may vary depending on the printer settings.

Answer Key


Measure the length of each line segment.

1) 


3 cm

2) 


11 cm

3) 

6 cm

4) 

4 cm

5) 

9 cm

Draw a line segment for each measure.

6) 8 cm



7) 2 cm



8) 5 cm



9) 10 cm



10) 12 cm

