




Line Segment - Ruler

Measure the length of each line segment.

1)  cm

2)  cm

3)  cm

4)  cm

5)  cm

Draw a line segment for each measure.

6) 6 cm

7) 10 cm

8) 14 cm

9) 4 cm

10) 11 cm


Name : _____


Score : _____

Note : Answers may vary depending on the printer settings.


Answer Key

Measure the length of each line segment.

1)  **13** cm

2)  **9** cm

3)  **7** cm

4)  **3** cm

5)  **5** cm

Draw a line segment for each measure.

6) 6 cm 

7) 10 cm 

8) 14 cm 

9) 4 cm 

10) 11 cm 