



Line Segment - Ruler

Measure the length of each line segment.

1)  mm

2)  mm

3)  mm

4)  mm

5)  mm

Draw a line segment for each measure.

6) 71 mm

7) 107 mm

8) 140 mm

9) 46 mm

10) 110 mm


Name : _____


Score : _____

Note : Answers may vary depending on the printer settings.

Answer Key

Measure the length of each line segment.

1)  **135** mm

2)  **90** mm

3)  **68** mm

4)  **34** mm

5)  **50** mm

Draw a line segment for each measure.

6) 71 mm 

7) 107 mm 

8) 140 mm 

9) 46 mm 

10) 110 mm 