



Line Segment - Ruler


Measure the length of each line segment.

1)  mm

2)  mm

3)  mm

4)  mm

5)  mm

Draw a line segment for each measure.

6) 131 mm

7) 60 mm

8) 113 mm

9) 40 mm

10) 85 mm


Name : _____


Score : _____

Note : Answers may vary depending on the printer settings.

Answer Key


Measure the length of each line segment.

1)  100 mm

2)  124 mm

3)  70 mm

4)  25 mm

5)  97 mm

Draw a line segment for each measure.

6) 131 mm 

7) 60 mm 

8) 113 mm 

9) 40 mm 

10) 85 mm 