




Line Segment - Ruler

Measure the length of each line segment.

1)  mm

2)  mm

3)  mm

4)  mm

5)  mm

Draw a line segment for each measure.

6) 130 mm

7) 65 mm

8) 127 mm

9) 40 mm


10) 73 mm


Note : Answers may vary depending on the printer settings.


Answer Key

Measure the length of each line segment.

1)  **55** mm

2)  **110** mm


3)  **141** mm

4)  **100** mm

5)  **39** mm

Draw a line segment for each measure.

6) 130 mm 

7) 65 mm 

8) 127 mm 

9) 40 mm 

10) 73 mm 