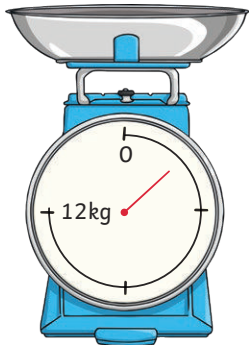
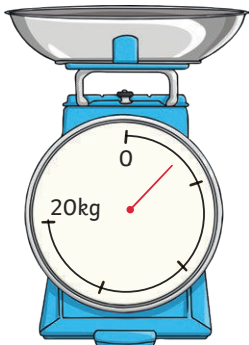
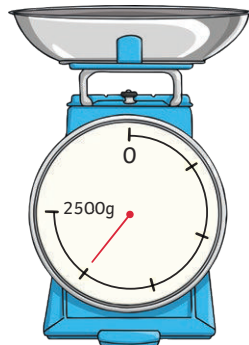

1) What is each interval worth on each set of scales?	Each interval is worth _____.	Each interval is worth _____.	Each interval is worth _____.
2) Mark the mass shown on each set of scales.	350g	48g	225kg

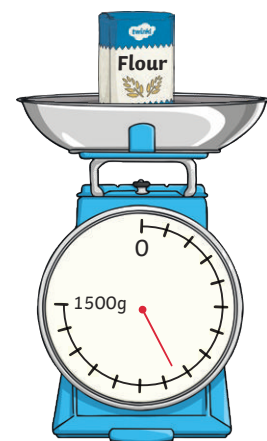
A bag of flour has a mass of 2kg.


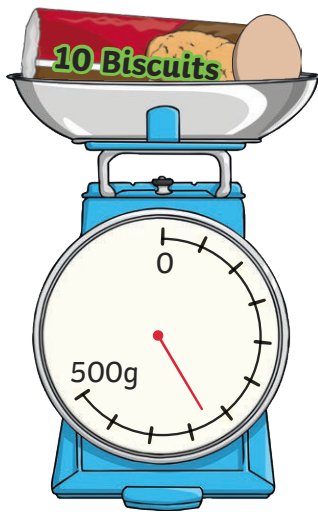
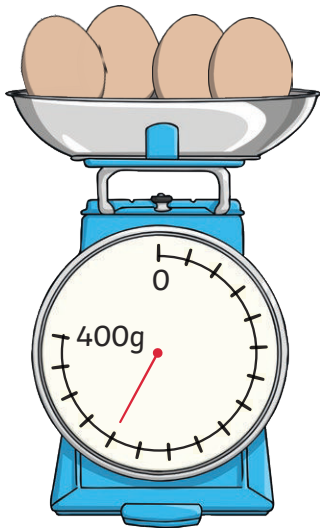
			
What is each interval worth on each set of scales?	Each interval is worth _____.	Each interval is worth _____.	Each interval is worth _____.

The pointer shows the mass of one bag of flour on each set of scales.

1) One set is incorrect. Which set?

2) Ali says that the mass of the bag of flour on this set of scales is 800g. Do you agree? Explain your answer.





- 1) Use the information shown to work out the mass of the chocolate bar. Show your working out.

- 2) The mass of a watermelon is 1kg. How many bars of chocolate would have the same mass as one watermelon?

- 3) What other combinations of ingredients would have the same mass as one watermelon?
