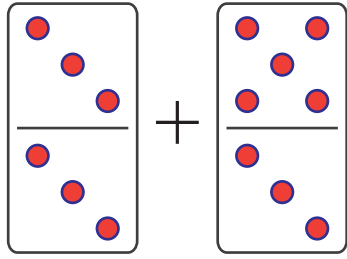


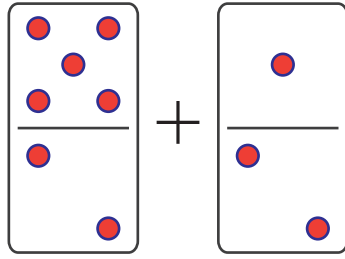
Domino Addition

<https://www.ITianAcademy.com>

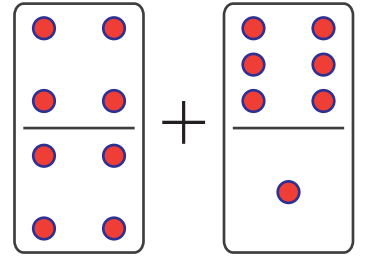
Count and add the dots



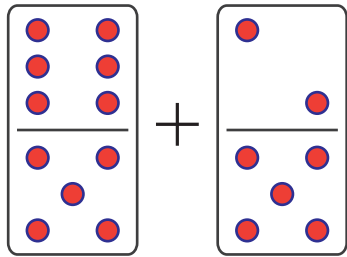
$$\square + \square = \square$$



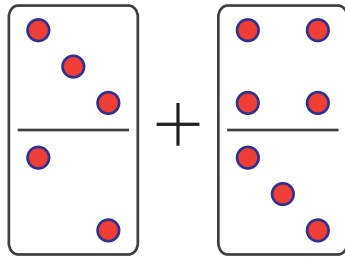
$$\square + \square = \square$$



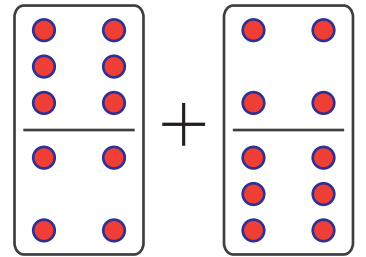
$$\square + \square = \square$$



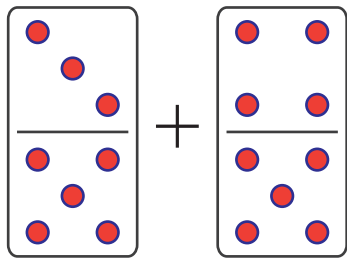
$$\square + \square = \square$$



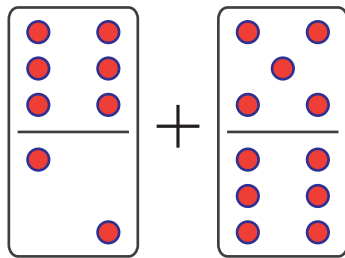
$$\square + \square = \square$$



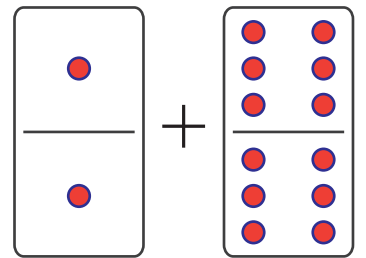
$$\square + \square = \square$$



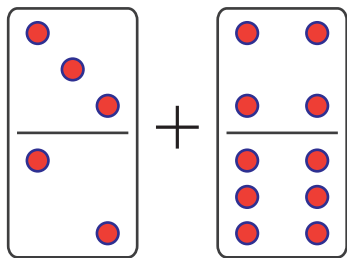
$$\square + \square = \square$$



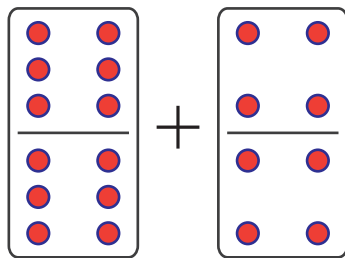
$$\square + \square = \square$$



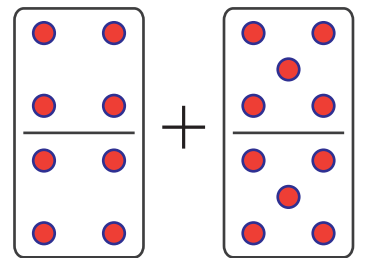
$$\square + \square = \square$$



$$\square + \square = \square$$



$$\square + \square = \square$$

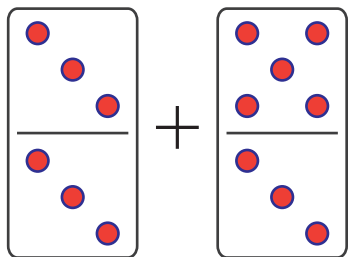


$$\square + \square = \square$$

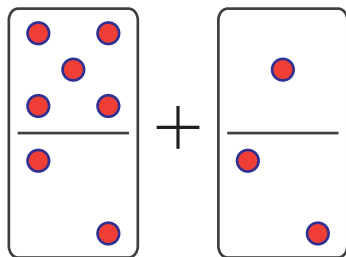
Domino Addition

<https://www.ITianAcademy.com>

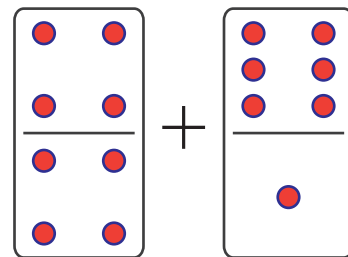
Count and add the dots



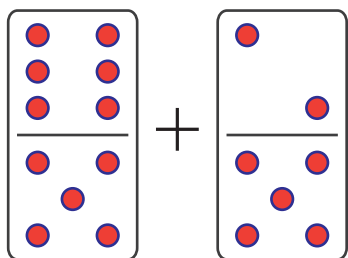
$$6 + 8 = 14$$



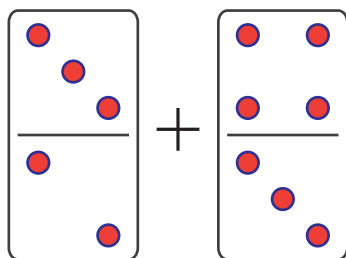
$$7 + 3 = 10$$



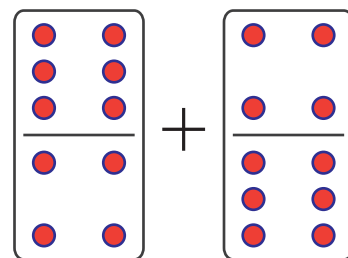
$$8 + 7 = 15$$



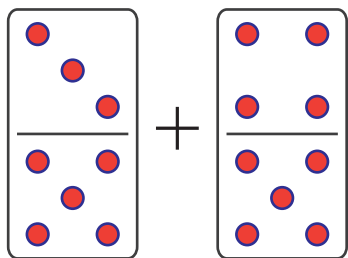
$$11 + 7 = 18$$



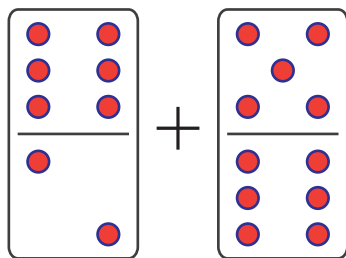
$$5 + 7 = 12$$



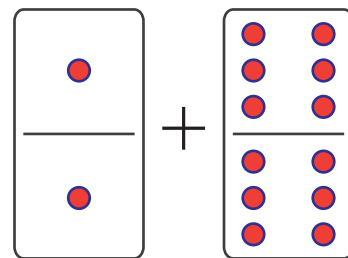
$$10 + 10 = 20$$



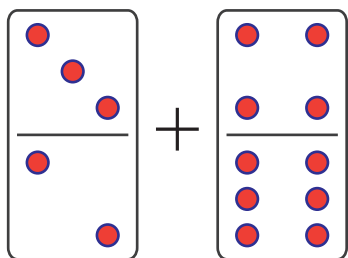
$$8 + 9 = 17$$



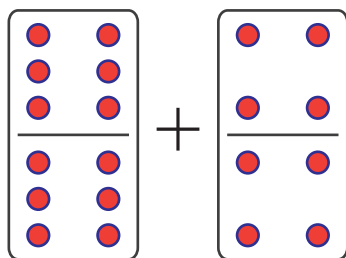
$$8 + 11 = 19$$



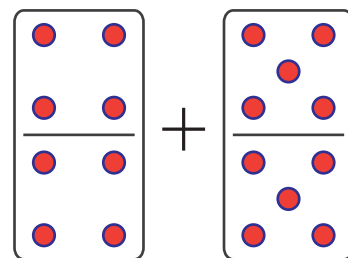
$$2 + 12 = 14$$



$$5 + 10 = 15$$



$$12 + 8 = 20$$



$$8 + 10 = 18$$

<https://www.ITianAcademy.com>