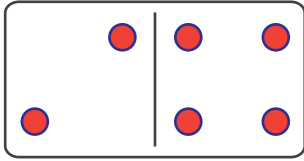
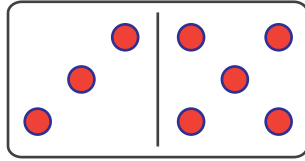


Name: \_\_\_\_\_ Score: \_\_\_\_\_

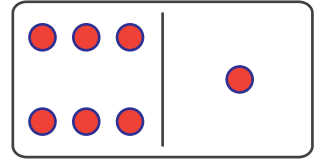
Count and add the dots on the dominoes.



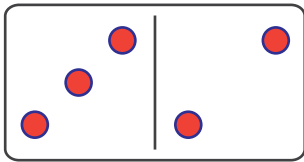
$$\underline{\quad} + \underline{\quad} = \underline{\quad}$$



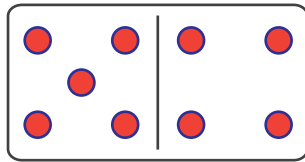
$$\underline{\quad} + \underline{\quad} = \underline{\quad}$$



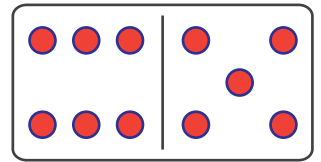
$$\underline{\quad} + \underline{\quad} = \underline{\quad}$$



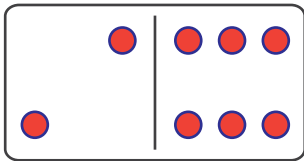
$$\underline{\quad} + \underline{\quad} = \underline{\quad}$$



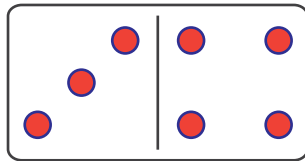
$$\underline{\quad} + \underline{\quad} = \underline{\quad}$$



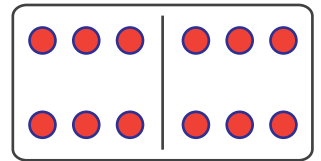
$$\underline{\quad} + \underline{\quad} = \underline{\quad}$$



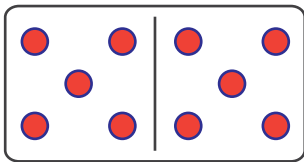
$$\underline{\quad} + \underline{\quad} = \underline{\quad}$$



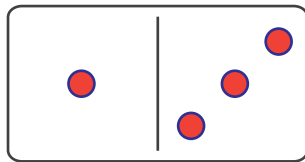
$$\underline{\quad} + \underline{\quad} = \underline{\quad}$$



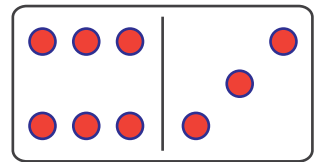
$$\underline{\quad} + \underline{\quad} = \underline{\quad}$$



$$\underline{\quad} + \underline{\quad} = \underline{\quad}$$



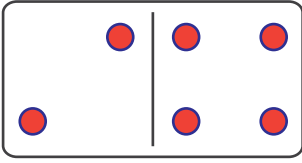
$$\underline{\quad} + \underline{\quad} = \underline{\quad}$$



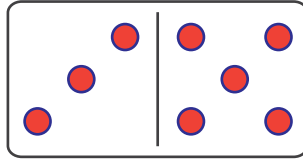
$$\underline{\quad} + \underline{\quad} = \underline{\quad}$$

# Answers

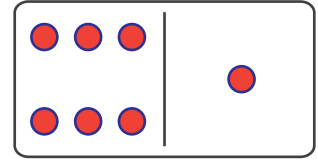
Count and add the dots on the dominoes.



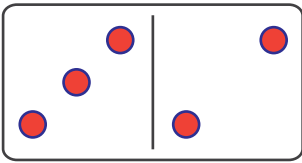
$$\underline{2} + \underline{4} = \underline{6}$$



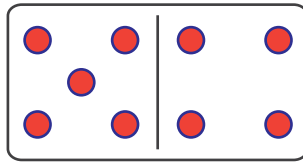
$$\underline{3} + \underline{5} = \underline{8}$$



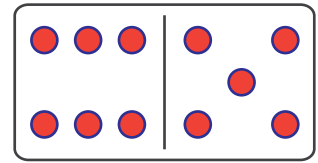
$$\underline{6} + \underline{1} = \underline{7}$$



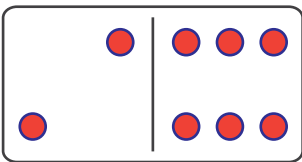
$$\underline{3} + \underline{2} = \underline{5}$$



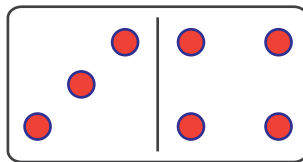
$$\underline{5} + \underline{4} = \underline{9}$$



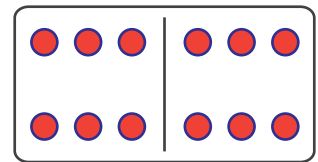
$$\underline{6} + \underline{5} = \underline{11}$$



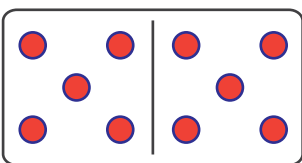
$$\underline{2} + \underline{6} = \underline{8}$$



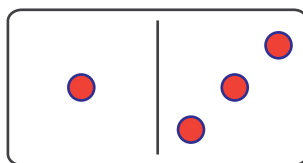
$$\underline{3} + \underline{4} = \underline{7}$$



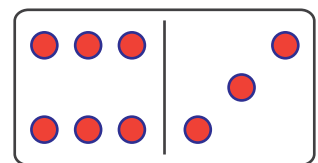
$$\underline{6} + \underline{6} = \underline{12}$$



$$\underline{5} + \underline{5} = \underline{10}$$



$$\underline{1} + \underline{3} = \underline{4}$$



$$\underline{6} + \underline{3} = \underline{9}$$