

Name : \_\_\_\_\_


**Two-Digit Addition - Regrouping**

- 1) Ashley decorated her Christmas tree with 15 candy canes and 46 colored paper stars. How many ornamental items in all did she use to decorate the Christmas tree?



\_\_\_\_\_

- 2) Lara's dog, Pluto buried 14 bones in the garden in the month of March. He buried 18 more bones the following month than he did in March. How many bones did Pluto bury in the month of April?




\_\_\_\_\_

- 3) The ground storage tank in Sam's house received 13 gallons of rain water during the first week of October. The following week, it received 9 more gallons of rain water than the first week. How many gallons of water in all did the tank receive through the fortnight?



\_\_\_\_\_

- 4) A balloon arch was put up for Madison's birthday at the entrance of her house. The arch was made up of 58 green and 74 white balloons. How many balloons in all were used to make the arch?



\_\_\_\_\_

- 5) Samantha has saved up \$95. She also received \$65 in pocket money from her father. How much money does she have altogether?



\_\_\_\_\_

Name : \_\_\_\_\_

## Two-Digit Addition - Regrouping


- 1) Ashley decorated her Christmas tree with 15 candy canes and 46 colored paper stars. How many ornamental items in all did she use to decorate the Christmas tree?



**61 ornamental items**

---

- 2) Lara's dog, Pluto buried 14 bones in the garden in the month of March. He buried 18 more bones the following month than he did in March. How many bones did Pluto bury in the month of April?



**32 bones**

---


- 3) The ground storage tank in Sam's house received 13 gallons of rain water during the first week of October. The following week, it received 9 more gallons of rain water than the first week. How many gallons of water in all did the tank receive through the fortnight?



**35 gallons of water**

---

- 4) A balloon arch was put up for Madison's birthday at the entrance of her house. The arch was made up of 58 green and 74 white balloons. How many balloons in all were used to make the arch?



**132 balloons**

---

- 5) Samantha has saved up \$95. She also received \$65 in pocket money from her father. How much money does she have altogether?



**\$160**

---