


Picture Addition

- 1) There are 4 fish in a fish pot. How many fish are there altogether?




_____ fish

- 2) A pack has 8 crayons. How many crayons are in total?



_____ crayons

- 3) There are 7 pearls in a necklace. How many pearls are there altogether?




_____ pearls

- 4) A chocolate box has 10 chocolates. How many chocolates are there in total?



_____ chocolates


- 5) Each branch has two owls. How many owls are in total?



_____ Owls

Picture Addition

- 1) There are 4 fish in a fish pot. How many fish are there altogether?




20 fish

- 2) A pack has 8 crayons. How many crayons are in total?



24 crayons

- 3) There are 7 pearls in a necklace. How many pearls are there altogether?




14 pearls

- 4) A chocolate box has 10 chocolates. How many chocolates are there in total?



30 chocolates

- 5) Each branch has two owls. How many owls are in total?



8 Owls