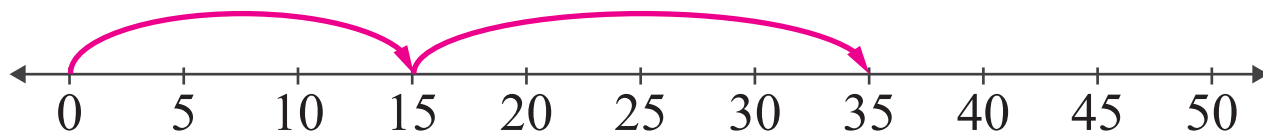


# Number Lines: Sum up to 50

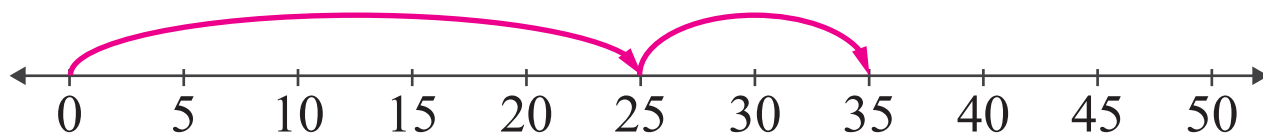
<https://www.IITianAcademy.com>

Name: \_\_\_\_\_ Score: \_\_\_\_\_

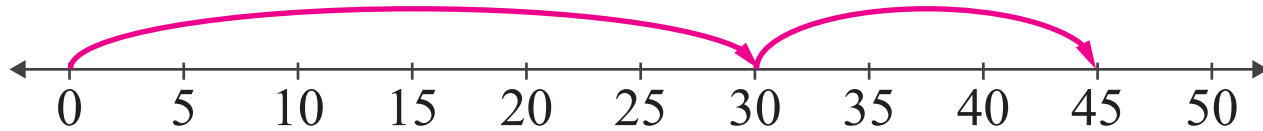
Look at the number lines and complete the addition sentences.



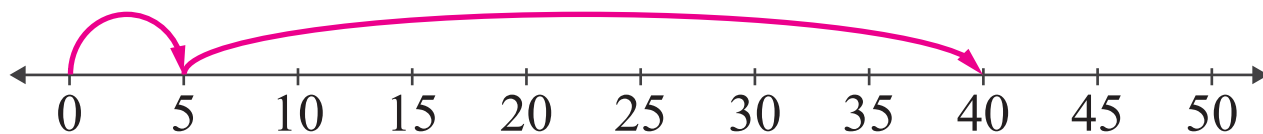
$$\square + \square = \square$$



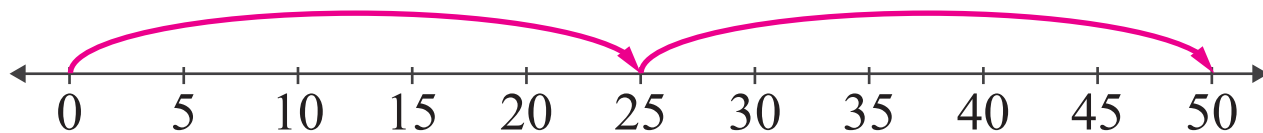
$$\square + \square = \square$$



$$\square + \square = \square$$



$$\square + \square = \square$$

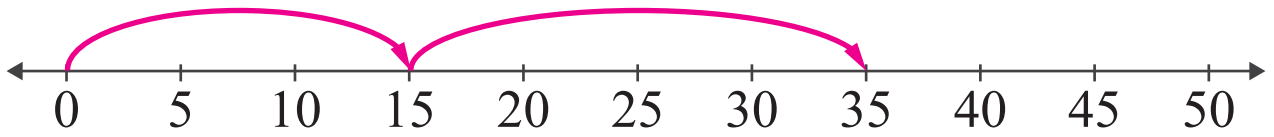


$$\square + \square = \square$$

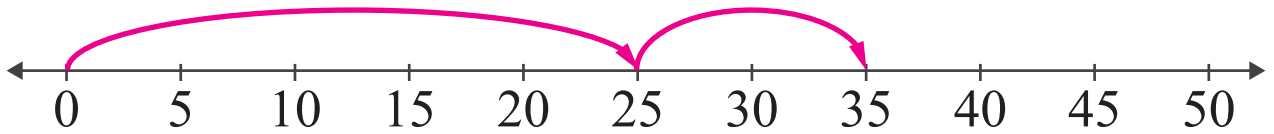
<https://www.IITianAcademy.com>

# Answers

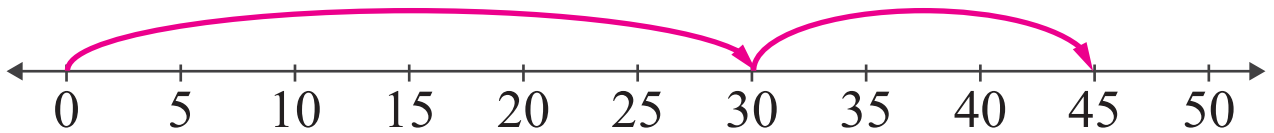
Look at the number lines and complete the addition sentences.



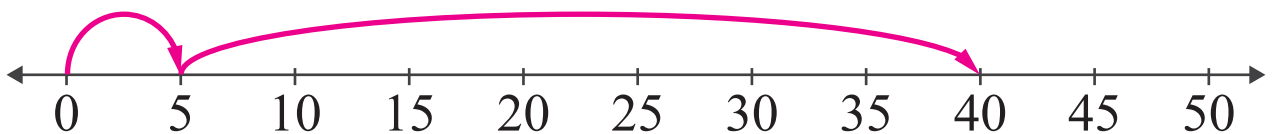
$$\boxed{15} + \boxed{20} = \boxed{35}$$



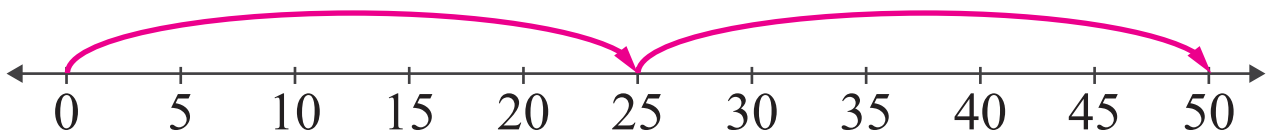
$$\boxed{25} + \boxed{10} = \boxed{35}$$



$$\boxed{30} + \boxed{15} = \boxed{45}$$



$$\boxed{5} + \boxed{35} = \boxed{40}$$



$$\boxed{25} + \boxed{25} = \boxed{50}$$