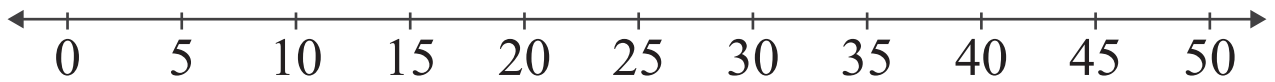


Number Lines: Sum up to 50

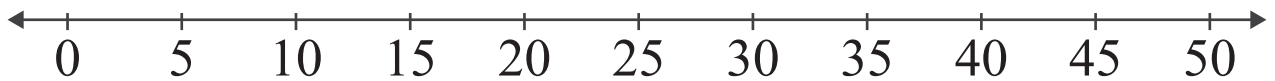
<https://www.IITianAcademy.com>

Name: _____ Score: _____

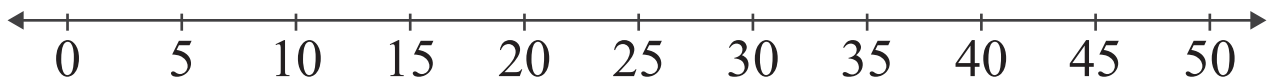
Add the numbers and use the number line to show how to find the sum.



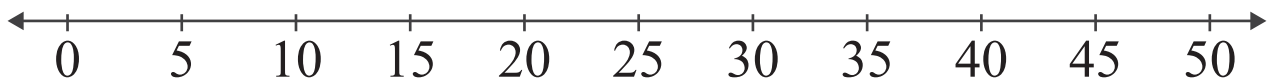
$$20 + 20 = \square$$



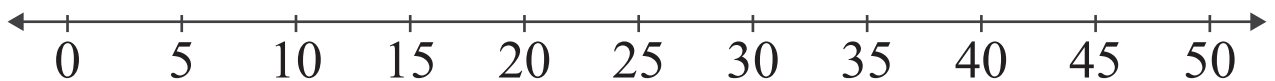
$$35 + 15 = \square$$



$$30 + 15 = \square$$



$$5 + 25 = \square$$

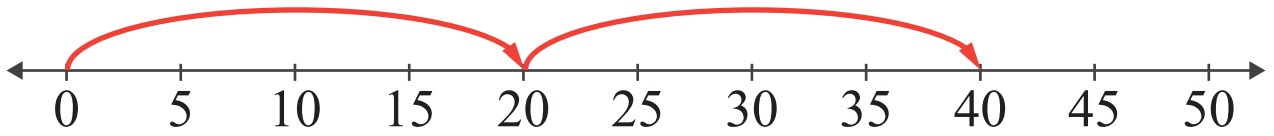


$$25 + 20 = \square$$

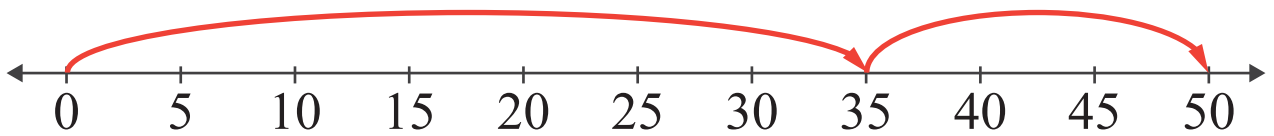
<https://www.IITianAcademy.com>

Answers

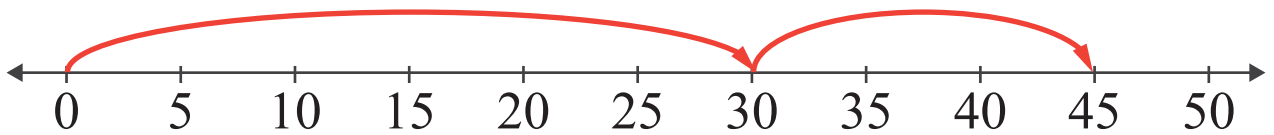
Add the numbers and use the number line to show how to find the sum.



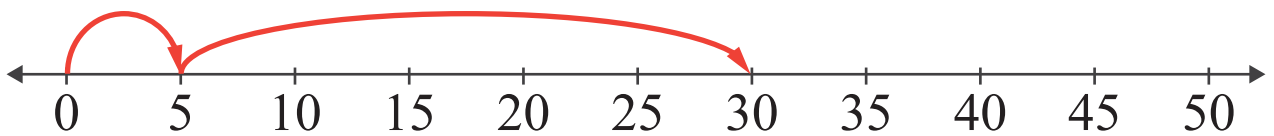
$$20 + 20 = \boxed{40}$$



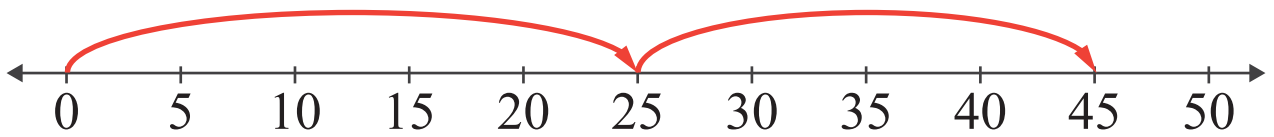
$$35 + 15 = \boxed{50}$$



$$30 + 15 = \boxed{45}$$



$$5 + 25 = \boxed{30}$$



$$25 + 20 = \boxed{45}$$