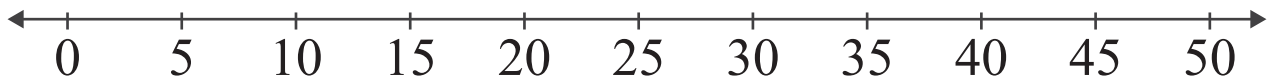


# Number Lines: Sum up to 50

<https://www.IITianAcademy.com>

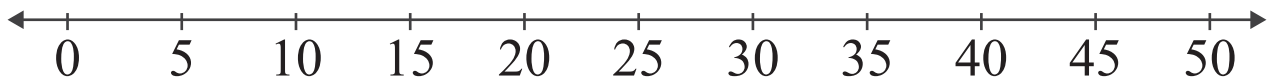
Name: \_\_\_\_\_ Score: \_\_\_\_\_

Add the numbers and use the number line to show how to find the sum.



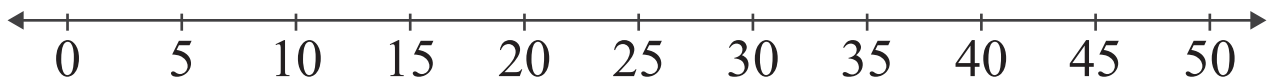
$$10 + 30 = \boxed{\phantom{00}}$$

---



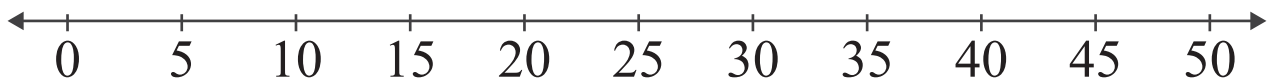
$$25 + 15 = \boxed{\phantom{00}}$$

---



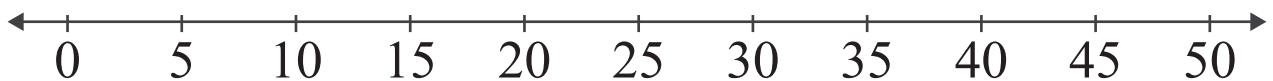
$$30 + 20 = \boxed{\phantom{00}}$$

---



$$5 + 45 = \boxed{\phantom{00}}$$

---

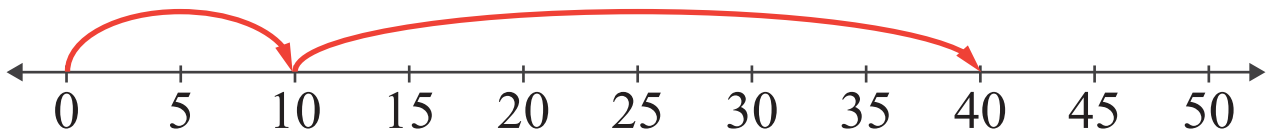


$$15 + 35 = \boxed{\phantom{00}}$$

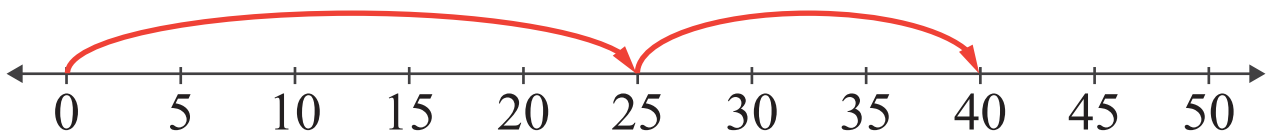
<https://www.IITianAcademy.com>

# Answers

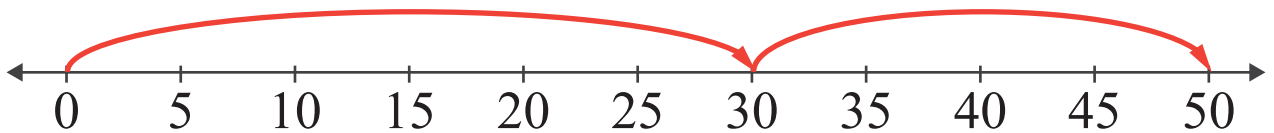
Add the numbers and use the number line to show how to find the sum.



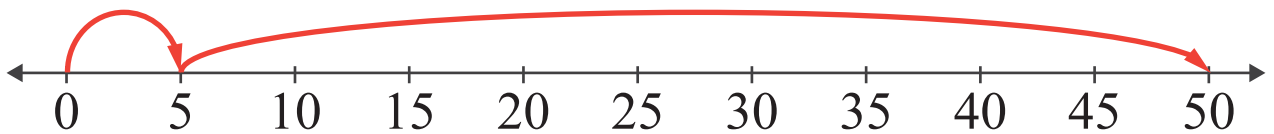
$$10 + 30 = \boxed{40}$$



$$25 + 15 = \boxed{40}$$



$$30 + 20 = \boxed{50}$$



$$5 + 45 = \boxed{50}$$



$$15 + 35 = \boxed{50}$$