

Odd and Even Numbers

Name: _____ <https://www.IITianAcademy.com> Score: _____




Count the objects and tell whether there is an odd or even number of objects



How many papers? 10

Odd or even? Even




How many apples? _____

Odd or even? _____



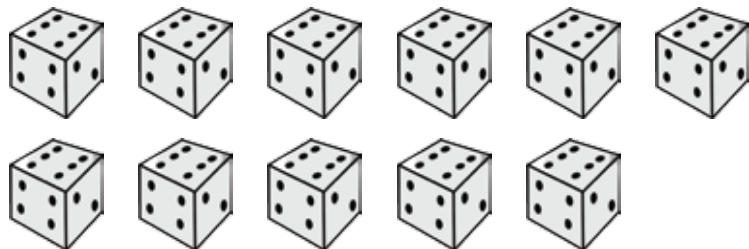
How many balls? _____

Odd or even? _____



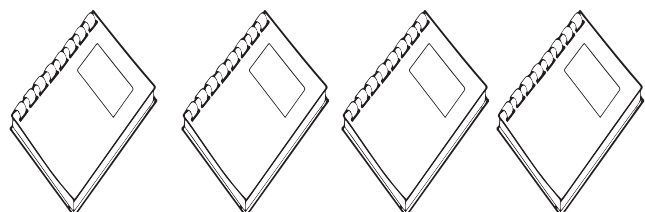
How many pigs? _____

Odd or even? _____



How many dice? _____

Odd or even? _____



How many books? _____

Odd or even? _____

Answers

<https://www.IITianAcademy.com>




Count the objects and tell whether there is an odd or even number of objects



How many papers? 10

Odd or even? Even




How many apples? 9

Odd or even? Odd



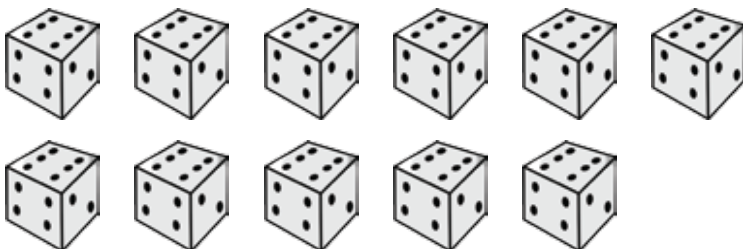
How many balls? 8

Odd or even? Even



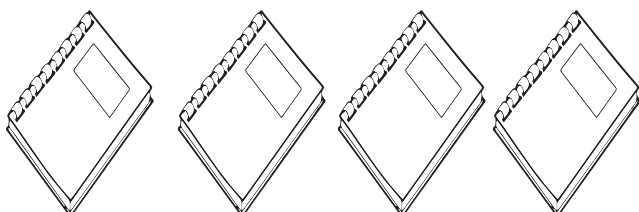
How many pigs? 3

Odd or even? Odd



How many dice? 11

Odd or even? Odd



How many books? 4

Odd or even? Even

<https://www.IITianAcademy.com>