


# Odd and Even Numbers

Name: <https://www.ITianAcademy.com> Score: \_\_\_\_\_



Count the objects and tell whether there is an odd or even number of objects



How many sheep? \_\_\_\_\_

Odd or even? \_\_\_\_\_




How many bananas? \_\_\_\_\_

Odd or even? \_\_\_\_\_



How many babies? \_\_\_\_\_

Odd or even? \_\_\_\_\_



How many cats? \_\_\_\_\_

Odd or even? \_\_\_\_\_



How many frogs? \_\_\_\_\_

Odd or even? \_\_\_\_\_



How many people? \_\_\_\_\_


Odd or even? \_\_\_\_\_

# Answers

<https://www.IITianAcademy.com>



Count the objects and tell whether there is an odd or even number of objects



How many sheep? 7

Odd or even? Odd




How many bananas? 8

Odd or even? Even




How many babies? 5

Odd or even? Odd



How many cats? 6

Odd or even? Even



How many frogs? 4

Odd or even? Even



How many people? 9

Odd or even? Odd

<https://www.IITianAcademy.com>