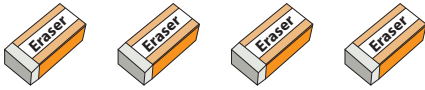


Grouping in Pairs | Odd & Even

Make groups of twos by circling the pictures. Write whether the number is odd or even.

1)



2)



3)



4)



5)

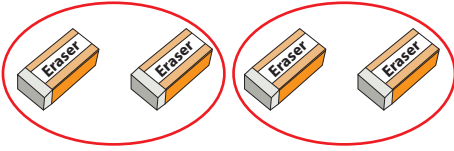


Grouping in Pairs | Odd & Even

Answer Key


Make groups of twos by circling the pictures. Write whether the number is odd or even.

1)



even

2)



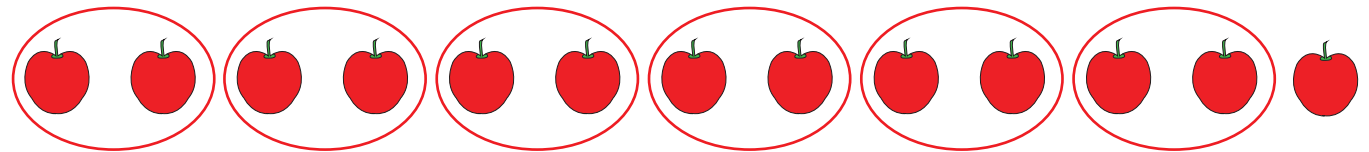
odd

3)




even

4)



odd

5)



even
