

# Grouping in Pairs | Odd & Even

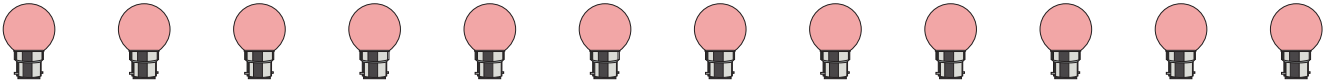
---

Make groups of twos by circling the pictures. Write whether the number is odd or even.

1)



2)



3)



4)



5)




# Grouping in Pairs | Odd & Even

Answer Key

Make groups of twos by circling the pictures. Write whether the number is odd or even.


1)



**odd**

---

2)



**even**

---

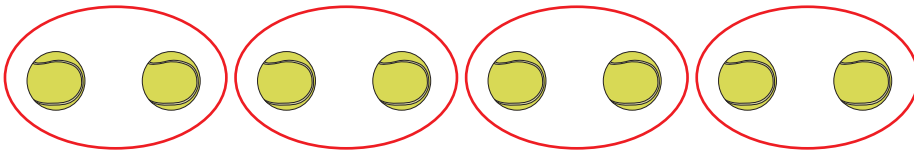
3)



**odd**

---


4)



**even**

---

5)



**odd**

---