


Make Numbers and Order

<https://www.IITianAcademy.com>

Name: _____ Score: _____

1)



Which 3 digit numbers can you make with these cards?

Order them from the smallest to the greatest.


2)



Which 3 digit numbers can you make with these cards?

Order them from the smallest to the greatest.

3)




Which 3 digit numbers can you make with these cards?

Order them from the smallest to the greatest.

Answers

1)




Which 3 digit numbers can you make with these cards?

835, 853, 385, 358, 583 and 583

Order them from the smallest to the greatest.

358, 385, 538, 583, 835, 853

2)



Which 3 digit numbers can you make with these cards?

536, 563, 356, 365, 653 and 635

Order them from the smallest to the greatest.

356, 365, 536, 563, 635, 653

3)



Which 3 digit numbers can you make with these cards?

972, 927, 792, 729, 297 and 279

Order them from the smallest to the greatest.

279, 297, 729, 792, 927, 972