



## Skip Counting by 3s - Maze


Count by 3s. Color the path, and find out where the Smiths went over the weekend.

			3	6	10	74	21	42
			20	9	12	15	18	21
			5	43	55	82	69	24
8	35	94	48				26	27
70	58	67	83				47	30
87	61	7	66	2	25	99	73	33
13			85	48	45	42	39	36
28			32	51	63	78	97	18
86	12	66	76	54	38			
72	41	63	60	57	65			
52	17	37	91	66	44	11	57	9

The Smiths went to the \_\_\_\_\_.

## Skip Counting by 3s - Maze

Count by 3s. Color the path, and find out where the Smiths went over the weekend.

			3	6	10	74	21	42
			20	9	12	15	18	21
			5	43	55	82	69	24
8	35	94	48				26	27
70	58	67	83				47	30
87	61	7	66	2	25	99	73	33
13			85	48	45	42	39	36
28			32	51	63	78	97	18
86	12	66	76	54	38			
72	41	63	60	57	65			
52	17	37	91	66	44	11	57	9

The Smiths went to the           **amusement park**           .