

Name : _____

Skip Count - 2s to 5s


- 1) Dahlia has 5 nickels in her handbag. A nickel is worth 5 cents. How many cents does she have in total? Identify the skip counting rule.




- 2) Chloe is pinning stars on a bulletin board. A few stars have no numbers on them. Help Chloe find the missing numbers in the sequence. By what number did she skip count?



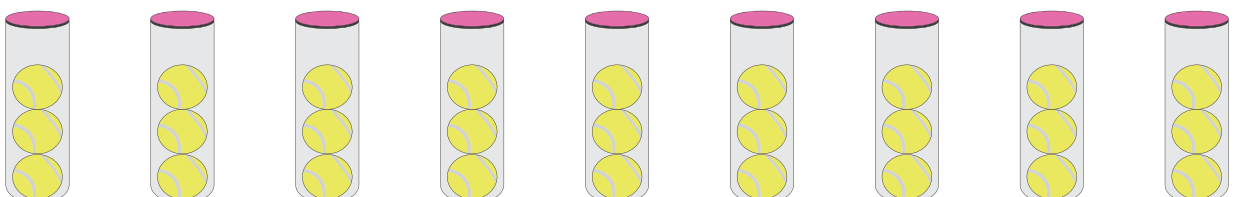
- 3) Avril has invited her friends over for coffee. If 3 trays hold 5 coffee mugs each, how many friends did she invite in total?



- 4) Benjamin bought 7 fishbowls. He places 5 fish in each fishbowl. Skip count to find the missing numbers.



- 5) A sports shop has 9 packs of tennis balls on display. Each pack contains 3 balls. How many tennis balls are there in all? Did you count by 5s?



Skip Count - 2s to 5s

- 1) Dahlia has 5 nickels in her handbag. A nickel is worth 5 cents. How many cents does she have in total? Identify the skip counting rule.




25 cents, Skip count by 5s

- 2) Chloe is pinning stars on a bulletin board. A few stars have no numbers on them. Help Chloe find the missing numbers in the sequence. By what number did she skip count?



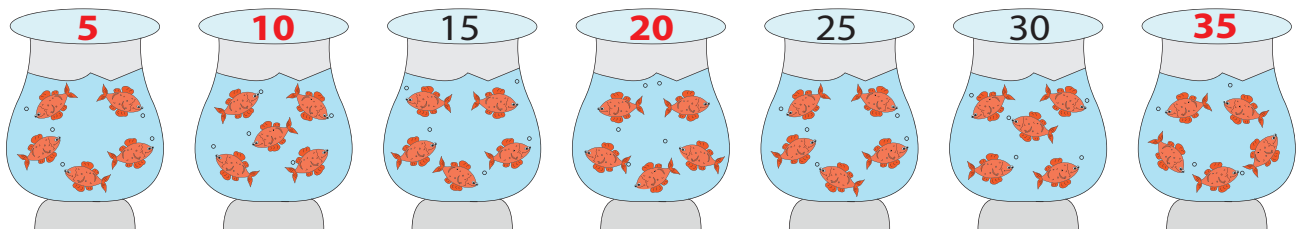
She counted by 2s.

- 3) Avril has invited her friends over for coffee. If 3 trays hold 5 coffee mugs each, how many friends did she invite in total?

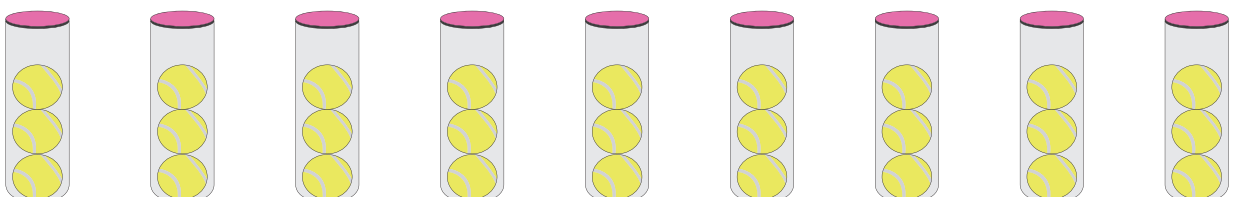


15 friends

- 4) Benjamin bought 7 fishbowls. He places 5 fish in each fishbowl. Skip count to find the missing numbers.



- 5) A sports shop has 9 packs of tennis balls on display. Each pack contains 3 balls. How many tennis balls are there in all? Did you count by 5s?



No, I counted by 3s. There are 27 tennis balls in all.