

Counting Backward by 12s



A) Count backward by 12s, and write the missing numbers.

1) 180, 168, 156, _____, _____, _____, _____, _____.

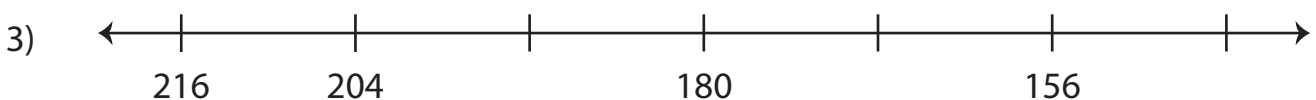
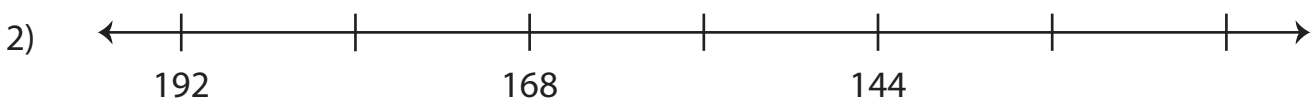
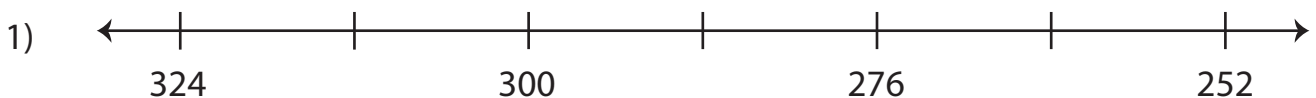
2) 96, 84, 72, _____, _____, _____, _____, _____.

3) 204, 192, 180, _____, _____, _____, _____, _____.

B) Count backward by 12s, and fill in the missing numbers on each apple.



C) Count backward by 12s, and complete each number line.



Counting Backward by 12s

Answer Key

A) Count backward by 12s, and write the missing numbers.

1) 180, 168, 156, 144, 132, 120, 108, 96.

2) 96, 84, 72, 60, 48, 36, 24, 12.

3) 204, 192, 180, 168, 156, 144, 132, 120.

B) Count backward by 12s, and fill in the missing numbers on each apple.



C) Count backward by 12s, and complete each number line.

